




Split the array into two parts showing multiplication facts you know. Explain how you can use those facts to find the answer.


1.  $8 \times 6$



2.  $4 \times 6$




3.  $6 \times 7$



4.  $7 \times 3$



5.  $8 \times 4$



6.  $7 \times 8$

